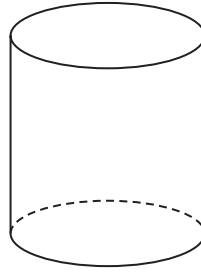


3D Shapes

November 2021 Paper 1

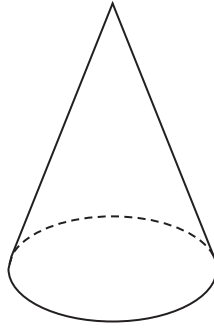
6 (b) Write down the mathematical name of this 3-D shape.



.....
(1)

November 2023 Paper 2

7 Here is a 3-D shape.



(a) Write down the name of this 3-D shape.

.....
(1)

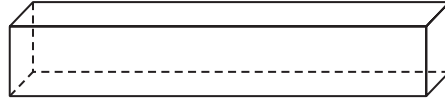
(b) In the space below, draw a sketch of a triangular prism.

(1)

(Total for Question 7 is 2 marks)

June 2023 Paper 3

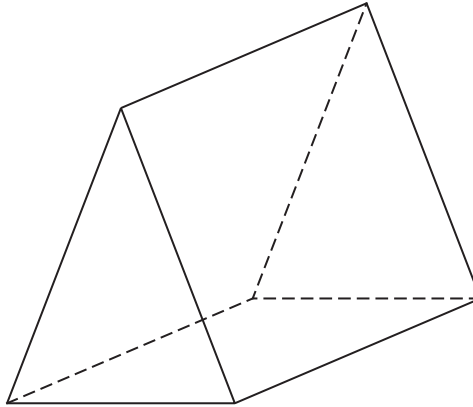
The diagram shows a solid shape.



- 8 (b) Write down the mathematical name of this shape.

.....
(1)

- 9 The diagram shows a solid triangular prism.



- (a) Write down the number of faces of the prism.

.....
(1)

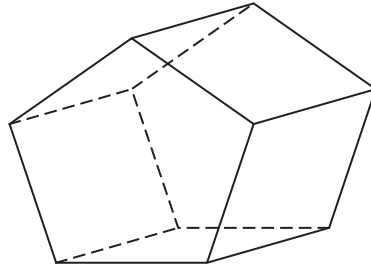
- (b) Write down the number of edges of the prism.

.....
(1)

(Total for Question 9 is 2 marks)

November 2023 Paper 3

Here is a prism.



Each edge of the prism has a length of 7.5 cm.

10 (b) Work out the total length of the edges of the prism.

..... cm
(2)