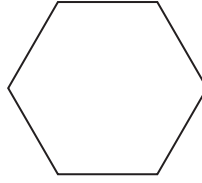


2D Shapes

- 4 Write down the mathematical name of this polygon.



.....
(Total for Question 4 is 1 mark)

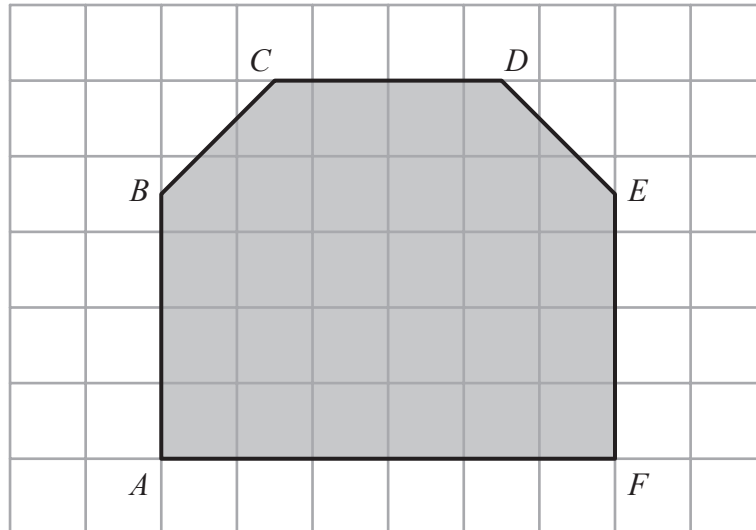
June 2024 Paper 2

7 (c) In the space below, draw a hexagon.

(1)

June 2022 Paper 2

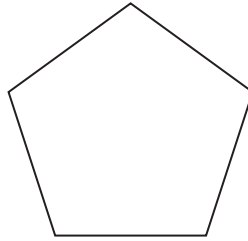
7 Here is polygon $ABCDEF$ on a square grid.



(a) Write down the mathematical name of the polygon.

.....
(1)

10 Here is a polygon.



(a) Write down the mathematical name of this polygon.

.....
(1)