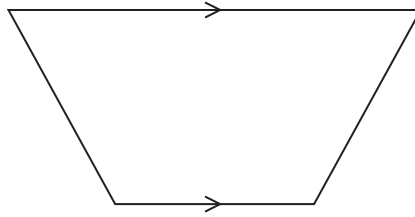


# Quadrilaterals

November 2021 Paper 1

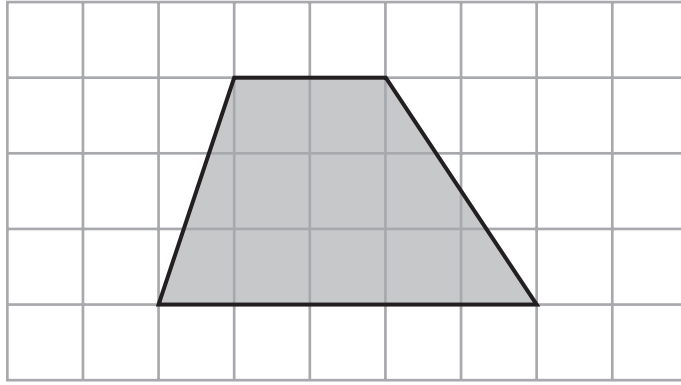
- 6 (a) Write down the mathematical name of this quadrilateral.



.....  
(1)

November 2024 Paper 3

7 Here is a quadrilateral.



(a) Write down the special name for this quadrilateral.

.....  
(1)

## June 2023 Paper 3

8 A quadrilateral has 4 right angles and 4 sides of equal length.

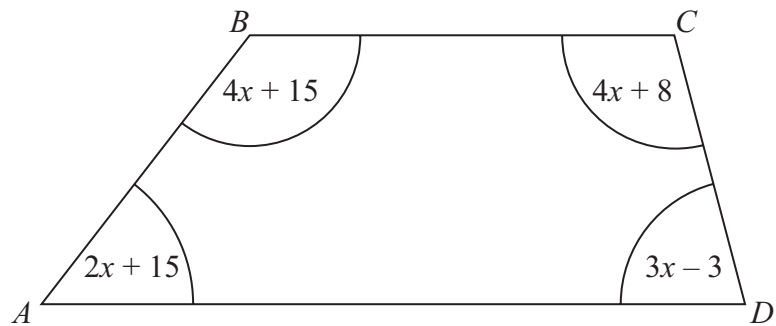
(a) Write down the mathematical name of this quadrilateral.

---

(1)

June 2024 Paper 2

26  $ABCD$  is a quadrilateral.



All angles are measured in degrees.

Show that  $ABCD$  is a trapezium.

---

(Total for Question 26 is 4 marks)